

1st & 2ND Grade Word Math Problems 2


Name _____

*DRAW PICTURES IN THE
EMPTY BOXES TO HELP
YOU WITH THE ANSWER*

LESSON 1

Carol is having a party she had **6** party hats and then she found **5** more. **How many hats does she now have ____?**


? ____ Total

PARTY HATS	FOUND HATS
	<div style="border: 2px solid black; height: 80px; width: 100%;"></div>

LESSON 2

Jim has **8** candy bars and Kathy has **4** Candy Bars. **How many candy bars do they both have all together ____?**


? ____ Total

Jim Candy Bars	Kathy's Candy bars
	<div style="border: 2px solid black; height: 80px; width: 100%;"></div>

LESSON 3

On the tree in the back-yard Patty saw **10** Owls on the left side of the tree. A few minutes later **4** more owls came to the right side. **How many owls where there all together? ____?**

? ____ Total

OWLS LEFT SIDE	OWLS RIGHT SIDE
	<div style="border: 2px solid black; height: 100px; width: 100%;"></div>