

1<sup>st</sup> and 2<sup>nd</sup> Grade Word Math Problem 4

*DRAW PICTURES IN THE  
EMPTY BOXES TO HELP  
YOU WITH THE ANSWER*


Name \_\_\_\_\_

**LESSON 1**


Bud went to his friends home looking for a puppy. He saw 12 puppies, and couldn't decide which one he wanted so he left. He came back two days later and 5 puppies gone, they were chosen by some other families. How many puppies are still left to choose from? \_\_\_\_\_

**Left \_\_\_\_?**

**Puppies**



**Puppies left**




**LESSON 2**


Linda was playing in the backyard. She had 8 bees around the bee hive. She threw a rock at the bee hive and 3 bees flew after her. How many bees are left at the bee hive \_\_\_\_\_?

**Total \_\_\_\_?**

**Bees in the bee hive**



**Bees that went after her**




**LESSON 3**

Marty left a jar of honey opened in the back yard for some bears. There were 5 bears before he left the honey jar opened and 4 more bears came after. How many bears were there total.

**Total \_\_\_\_?**

**Bears before the jar of honey**



**Bears after the open jar.**

