

1st & 2nd Grade Word Math Problem 5

***DRAW PICTURES IN THE
EMPTY BOXES TO HELP
YOU WITH THE ANSWER***


Name _____

LESSON 1


Matt picked 10 apples, He gave 1 to each of his 3 horses. How many apples did Matt have left ____?

Left ____?

APPLES PICKED



Gave 1 to each of his 3 to horses




LESSON 2


Jim was walking through the jungle with **9** bananas on his way home. **Several** monkeys jumped down from the trees and took **4** bananas. How many bananas did Jim have left ____?

Total ____?

Jim was carrying 9 bananas



How many bananas were left for Jim




LESSON 3

John was riding his motorcycle and he ran it into a pear tree. The tree had **14** pears after he hit the tree **6** pears fell to the ground. How many pears were still in the tree ____?

Total ____?

Pears in the tree



Pears that fell off the tree

