

# 1<sup>st</sup> & 2<sup>ND</sup> Grade Word Math Problem 6


Name \_\_\_\_\_

***DRAW PICTURES IN THE  
EMPTY BOXES TO HELP  
YOU WITH THE ANSWER***

## LESSON 1

Tina saw **9** beach balls on the beach. She saw some boys come over and they kicked **3** into the water. How many beach balls were left on the beach\_\_\_\_\_?

Beach balls on the sand




Left \_\_\_\_\_?

Beach balls kicked in the water

## LESSON 2

Jan found **12** star fish on the beach. Before she could catch them 4 star fish crawled back into the sea. How many star fish were left on the beach\_\_\_\_\_?

Star fish




Total \_\_\_\_\_?

Star fish left

## LESSON 3

John was riding his motorcycle and he ran it into a pear tree. The tree had **14** pears after he hit the tree **6** pears fell to the ground. How many pears were still in the tree\_\_\_\_\_?

Pears in the tree



Total \_\_\_\_\_?

Pears that fell off the tree