

Lesson 2 Calculate the perimeter odd shapes

Name _____

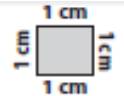
Directions:

Scan the QR Code listed above for the video instructions

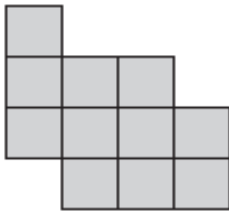
Count the perimeter of the shapes listed below. Each cube is equal to 1cm



The side length of each square is 1cm. Calculate the perimeter of each shape.

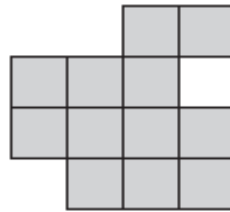


1)



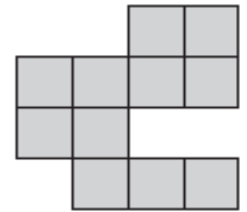
Perimeter = cm

2)



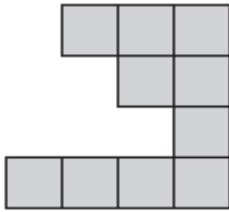
Perimeter = cm

3)



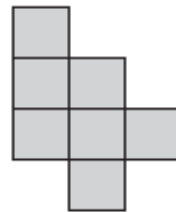
Perimeter = cm

4)



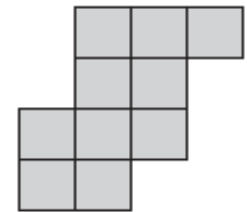
Perimeter = cm

5)



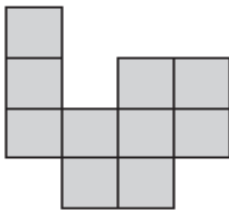
Perimeter = cm

6)



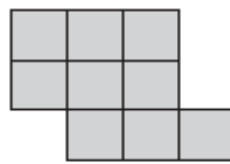
Perimeter = cm

7)



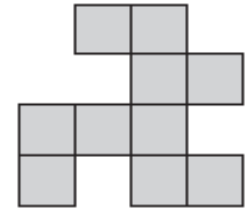
Perimeter = cm

8)



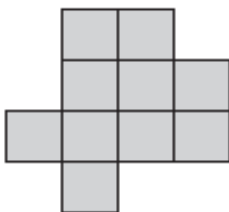
Perimeter = cm

9)



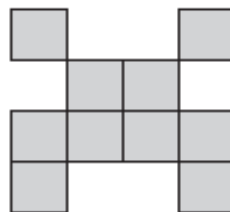
Perimeter = cm

10)



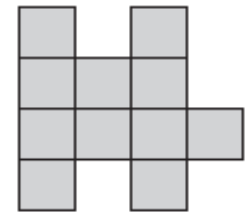
Perimeter = cm

11)



Perimeter = cm

12)



Perimeter = cm