


CLICK TO
WATCH LESSON



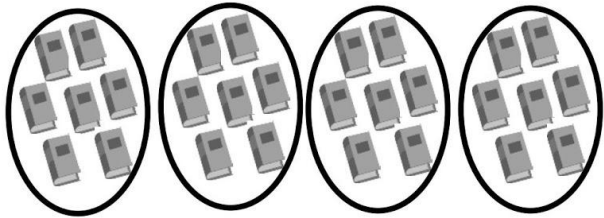
Name _____

1.



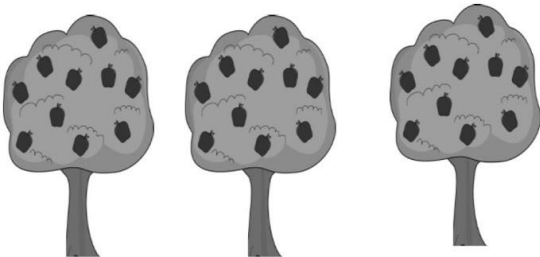
14 flowers are divided into 2 equal groups.
There are _____ flowers in each group.

2.



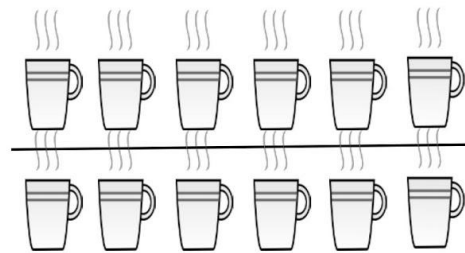
28 books are divided into 4 equal groups.
There are _____ books in each group.

3.




30 apples are divided into _____ equal groups.
There are _____ apples in each group.

4.



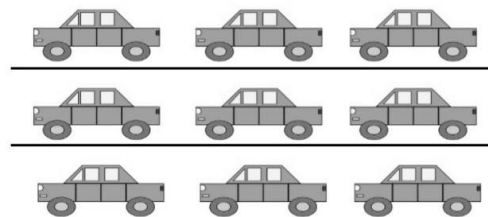
_____ cups are divided into _____ equal groups.
There are _____ cups in each group.
 $12 \div 2 = \underline{\hspace{2cm}}$

5.



There are _____ toys in each group.
 $15 \div 3 = \underline{\hspace{2cm}}$

6.



$9 \div 3 = \underline{\hspace{2cm}}$