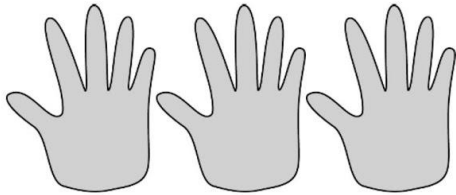


Name _____

CLICK TO
WATCH LESSON

1. Fill in the blanks to make true statements.



a. 3 groups of five = _____

3 fives = _____

$3 \times 5 =$ _____



b. $3 + 3 + 3 + 3 + 3 =$ _____

5 groups of three = _____




$5 \times 3 =$ _____



c. $6 + 6 + 6 + 6 =$ _____

_____ groups of six = _____

$4 \times$ _____ = _____



d. $4 +$ _____ $+$ _____ $+$ _____ $+$ _____ $+$ _____ $+$ _____ $=$ _____

6 groups of _____ $=$ _____

$6 \times$ _____ $=$ _____