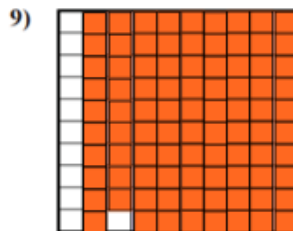
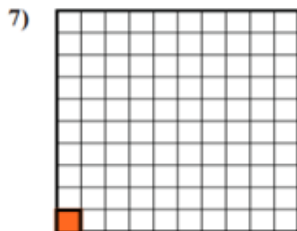
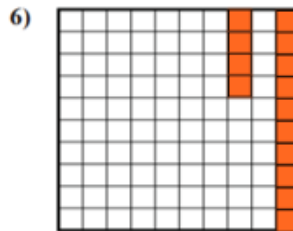
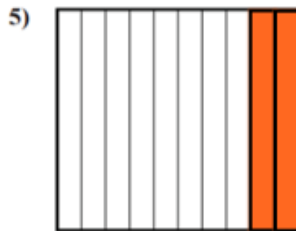


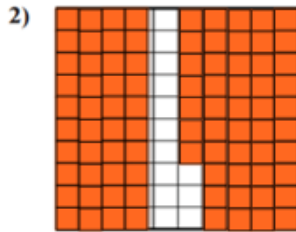
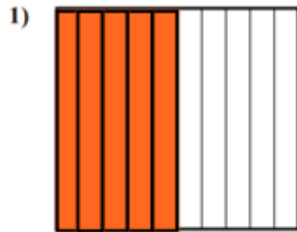


# Lesson 3 Decimals



Name \_\_\_\_\_

*Directions: Determine the amount shaded of the whole. Write your answer as a decimal. Click on the video button above to provide you with instructions and answers.*



Answers

1. \_\_\_\_\_
2. \_\_\_\_\_
3. \_\_\_\_\_
4. \_\_\_\_\_
5. \_\_\_\_\_
6. \_\_\_\_\_
7. \_\_\_\_\_
8. \_\_\_\_\_
9. \_\_\_\_\_
10. \_\_\_\_\_
11. \_\_\_\_\_
12. \_\_\_\_\_

