


# Lesson 2 Determine Fractions

Name \_\_\_\_\_



**Directions:** What fraction of the shape has been colored? Write the fraction under the shape. Click on the Video button at the top or the QR Code for instructions and answers.


1)



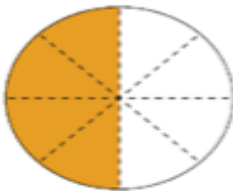

2)




3)



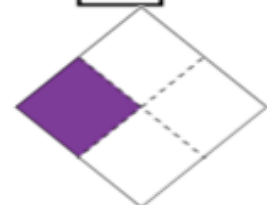

4)





5)





6)



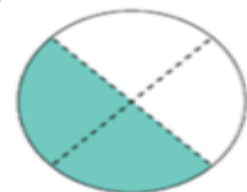

7)



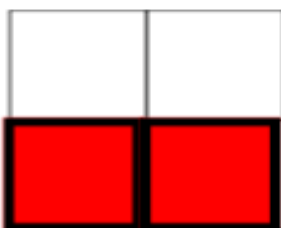

8)



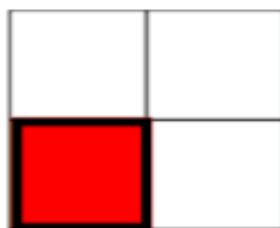

9)




10)




11)




12)