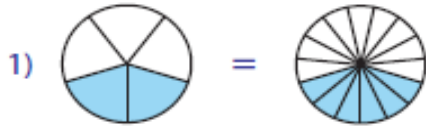


# Lesson – 2 Equivalent Fractions



Name \_\_\_\_\_

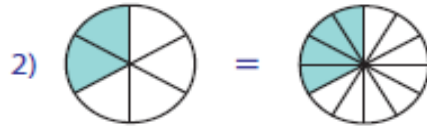
**Directions:** Click on the video button or scan in the QR Code to bring up the video for directions. Place the Equivalent Fraction in the spaces provided below. The video will provide answers at the end.



$$\frac{2}{5}$$



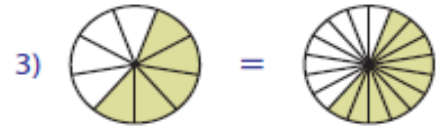
$$\frac{6}{15}$$



$$\frac{\quad}{\quad}$$



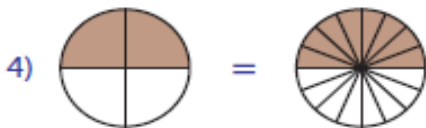
$$\frac{\quad}{\quad}$$



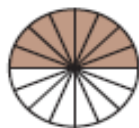
$$\frac{\quad}{\quad}$$



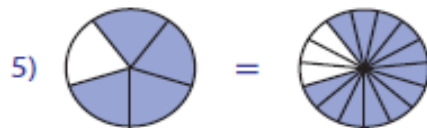
$$\frac{\quad}{\quad}$$



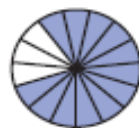
$$\frac{\quad}{\quad}$$



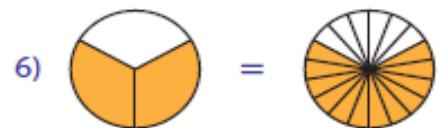
$$\frac{\quad}{\quad}$$



$$\frac{\quad}{\quad}$$



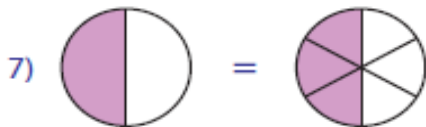
$$\frac{\quad}{\quad}$$



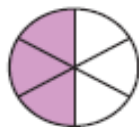
$$\frac{\quad}{\quad}$$



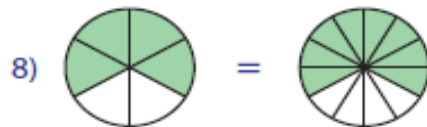
$$\frac{\quad}{\quad}$$



$$\frac{\quad}{\quad}$$



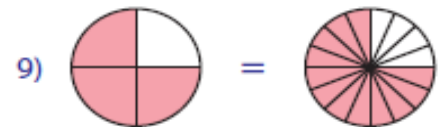
$$\frac{\quad}{\quad}$$



$$\frac{\quad}{\quad}$$



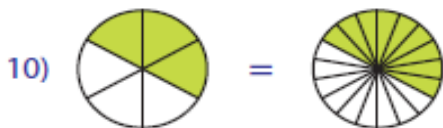
$$\frac{\quad}{\quad}$$



$$\frac{\quad}{\quad}$$



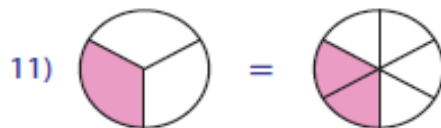
$$\frac{\quad}{\quad}$$



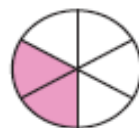
$$\frac{\quad}{\quad}$$



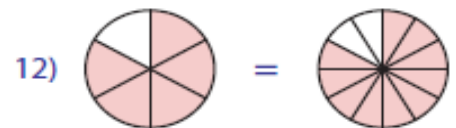
$$\frac{\quad}{\quad}$$



$$\frac{\quad}{\quad}$$



$$\frac{\quad}{\quad}$$



$$\frac{\quad}{\quad}$$



$$\frac{\quad}{\quad}$$