

LESSON 1A Mixed Numbers & Improper Fractions



Name _____

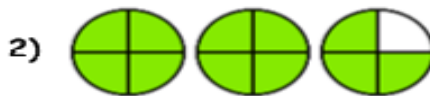
Directions: Click on the Video Button or scan in the QR Code to bring up the Video. Write the improper fraction and mixed number for each diagram. The video will provide you with the correct answers.

Write an improper fraction and a mixed number for each diagram.



Improper

Mixed



Improper

Mixed



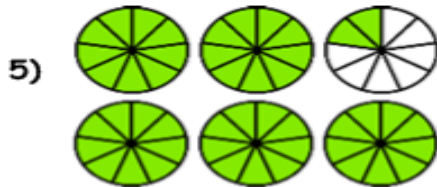
Improper

Mixed



Improper

Mixed



Improper

Mixed



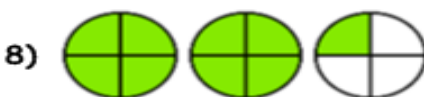
Improper

Mixed



Improper

Mixed



Improper

Mixed



Improper

Mixed



Improper

Mixed