










Lesson 7 Geometry Coded Message

Name _____ Directions: Decipher the Code message listed below to uncover the name of the object. Place the answers directly below the code in the same line.

A	B	C	D	E	F	G	H	I	J	K	L	M
1	2	3	4	5	6	7	8	9	10	11	12	13
N	O	P	Q	R	S	T	U	V	W	X	Y	Z
14	15	16	17	18	19	20	21	22	23	24	25	26

		
3-21-2-5	3-15-14-5	19-16-8-5-18-5
		
3-25-12-9-14-4-5-18	18-5-3-20-1-14-7-21-12-1-18 16-18-9-19-13	16-25-18-1-13-9-4
		
19-17-21-1-18-5 2-1-19-5-4 16-25-18-1-13-9-4	8-1-12-6- 1 19-16-8-5-18-5	20-18-9-1-14-7-21-12-1-18 16-18-9-19-13