

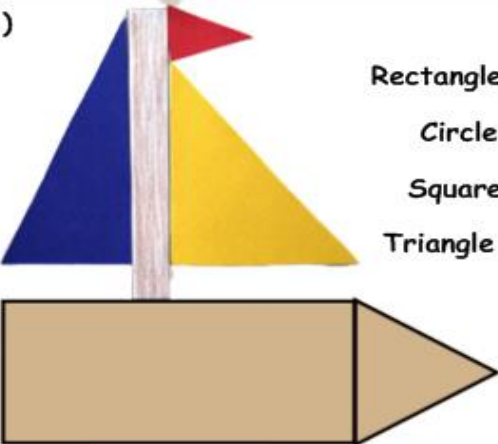
Lesson 2 Geometry Shapes

Name _____




Directions: Click on the button or scan in the QR Code to bring the video up. You are to find the number of figures that are composite for each item listed. Write the total number of each item you see in the spaces provided.

1)



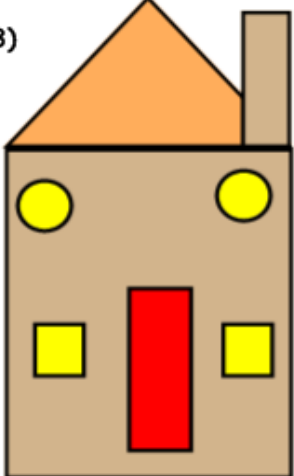
Rectangle _____
Circle _____
Square _____
Triangle _____

2)




Rectangle _____
Circle _____
Square _____
Triangle _____

3)



Rectangle _____
Circle _____
Square _____
Triangle _____

4)



Rectangle _____
Circle _____
Square _____
Triangle _____

Directions: Click on the button or scan in the QR Code to bring the video up. You are to find the number of figures that are composite for each item listed. Write the total number of each item you see in the spaces provided.