











LESSON 3 Greater Than Less Than



NAME \_\_\_\_\_

Click on the Video button or scan the QR Code OR to see the video to check your answers. Place a circle around the NUMBER in that group that has more.

<p>A</p>  <p>3</p>	<p>F</p>  <p>4</p>
<p>B</p>  <p>2</p>	<p>G</p>  <p>1</p>
<p>C</p>  <p>4</p>	<p>H</p>  <p>5</p>
<p>D</p>  <p>3</p>	<p>I</p>  <p>2</p>
<p>E</p>  <p>5</p>	<p>J</p>  <p>3</p>