

































Lesson B Money

Name _____



Directions: You have 10 items listed as coins. Dimes – Nickels – Pennies are listed for you. You must count the coins and place the total in the space provided. The video of instructions may be reached by clicking the icon above.

1)  +  +  +  = Total _____ _____¢ _____¢ _____¢ _____¢	2)  +  +  = Total _____ _____¢ _____¢ _____¢
3)  +  +  +  = Total _____ _____¢ _____¢ _____¢ _____¢	4)  +  = Total _____ _____¢ _____¢
5)  +  +  = Total _____ _____¢ _____¢ _____¢	6)  +  = Total _____ _____¢ _____¢
7)  +  +  = Total _____ _____¢ _____¢ _____¢	8)  +  +  +  = Total _____ _____¢ _____¢ _____¢ _____¢
9)  +  +  = Total _____ _____¢ _____¢ _____¢	10)  +  +  +  = Total _____ _____¢ _____¢ _____¢ _____¢