


























Lesson E-2 Money

Name _____

Directions: Click the button or scan the QR Code to play the video. You need to place a circle around the total for the coins that are listed in each cell. The video will provide instructions and the answers.



<p>1 Penny 1¢</p> 	<p>1 Nickel 5¢</p> 	<p>1 Dime 10¢</p> 	<p>1 Quarter 25¢</p> 
			
			<p>5 Nickels</p> 
			<p>25 Pennies</p> 

A		B	
	5 ¢		5 ¢
	10 ¢		15 ¢
	9 ¢		20 ¢
	30 ¢		26 ¢
	25 ¢		25 ¢
	15 ¢		15 ¢
	10 ¢		15 ¢
	22 ¢		25 ¢
	32 ¢		30 ¢