

Lesson 3 Multiple Choice Arrays

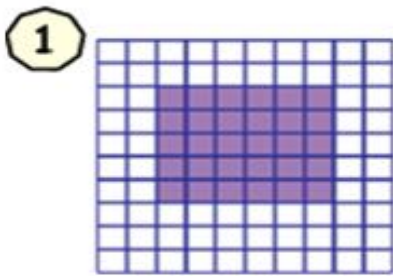
Name _____



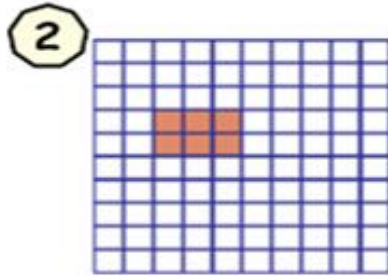
Directions: Use the information provided allowing you to complete each array

Scan the OR Code to check answers.

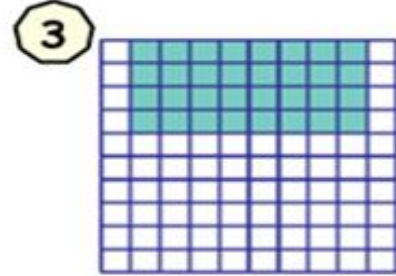
Write the multiplication equation that describes each model.



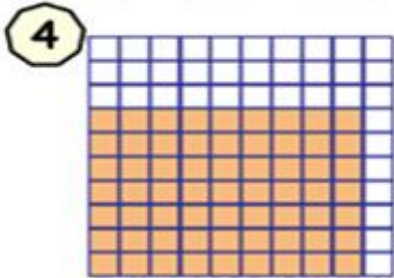
___ x ___ = ___



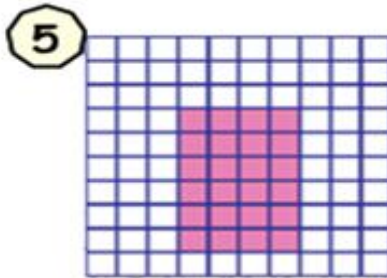
___ x ___ = ___



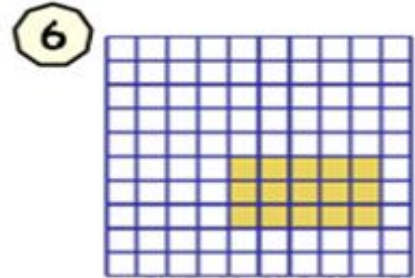
___ x ___ = ___



___ x ___ = ___



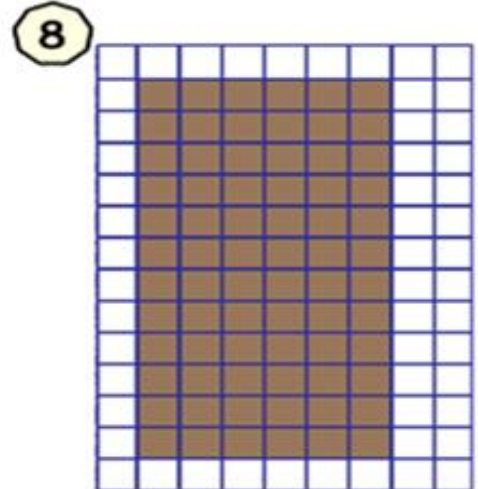
___ x ___ = ___



___ x ___ = ___



___ x ___ = ___



___ x ___ = ___



___ x ___ = ___