





























LESSON 1 MONEY

NAME _____

Write the amount below each coin and then the total
Scan the QR Code to check your answers.



1)  +  = Total _____ _____ ¢ _____ ¢	2)  +  +  = Total _____ _____ ¢ _____ ¢ _____ ¢
3)  +  = Total _____ _____ ¢ _____ ¢	4)  +  +  +  = Total _____ _____ ¢ _____ ¢ _____ ¢ _____ ¢
5)  +  = Total _____ _____ ¢ _____ ¢	6)  +  +  +  = Total _____ _____ ¢ _____ ¢ _____ ¢ _____ ¢
7)  +  = Total _____ _____ ¢ _____ ¢	8)  +  +  = Total _____ _____ ¢ _____ ¢ _____ ¢
9)  +  = Total _____ _____ ¢ _____ ¢	10)  +  +  +  = Total _____ _____ ¢ _____ ¢ _____ ¢ _____ ¢