

Lesson 15 Place Values

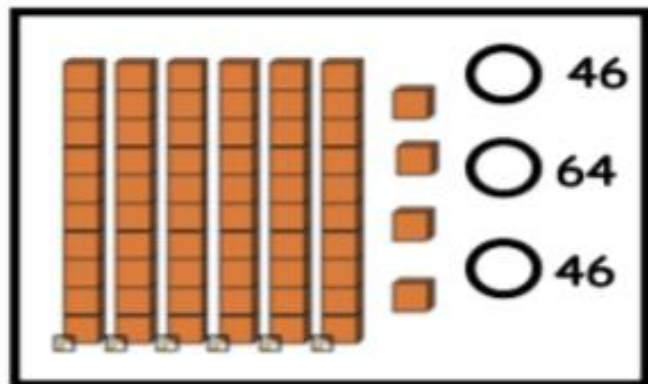
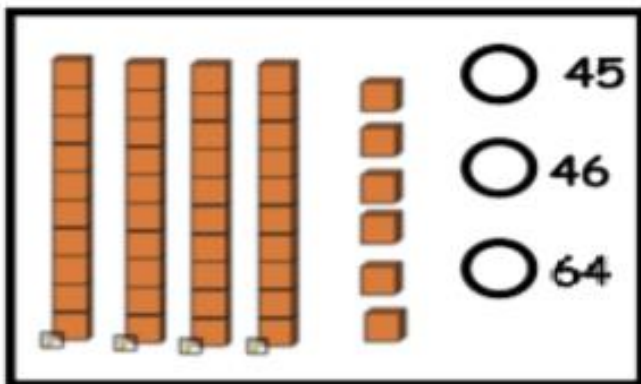


Part-1 Directions: *Shad in the following numbers that are provided on the left. Read carefully because you will be provided with tens and ones.*

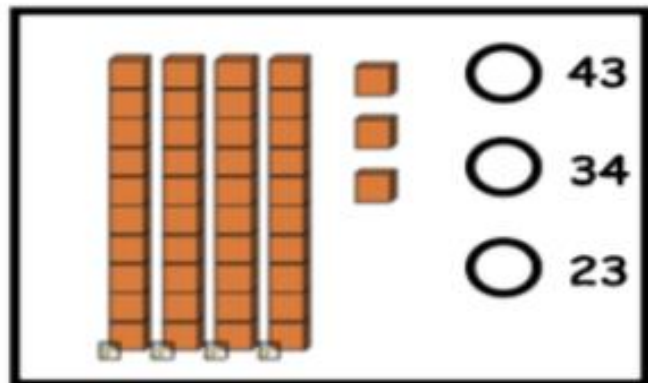
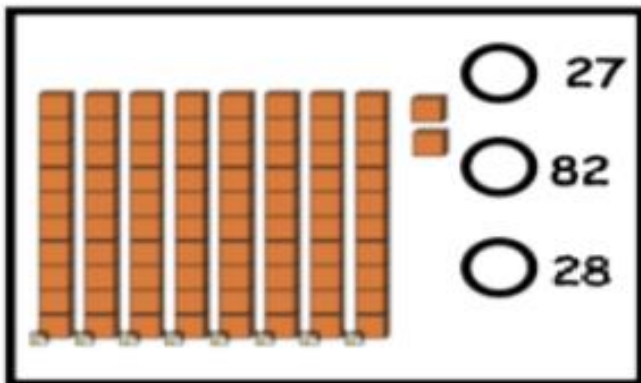
1. 2 tens and 2 ones
2. 8 ones and 3 tens
3. 4 tens and 1 one
4. 9 ones and 7 tens
5. 4 tens and 0 ones
6. 3 ones and 9 tens
7. 2 ones and 5 tens
8. 7 ones and 1 ten
9. 7 ones and 6 tens
10. 9 ones and 9 tens

1	2	3	4	5	6	7	8	9	10
11	12	13	14	15	16	17	18	19	20
21	22	23	24	25	26	27	28	29	30
31	32	33	34	35	36	37	38	39	40
41	42	43	44	45	46	47	48	49	50
51	52	53	54	55	56	57	58	59	60
61	62	63	64	65	66	67	68	69	70
71	72	73	74	75	76	77	78	79	80
81	82	83	84	85	86	87	88	89	90
91	92	93	94	95	96	97	98	99	100

Part-2 *Darken in the correct answer for each problem below.*



1



2