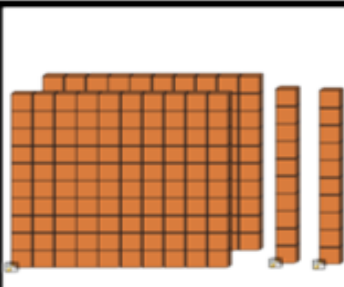
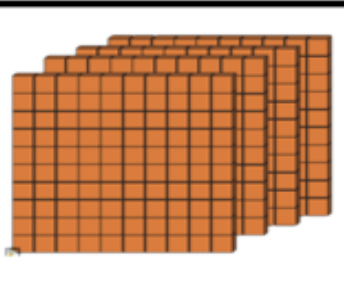
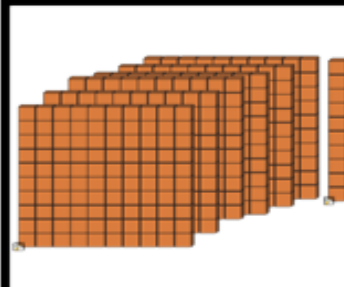
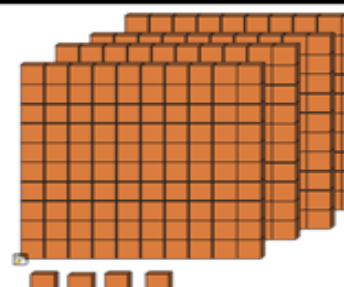
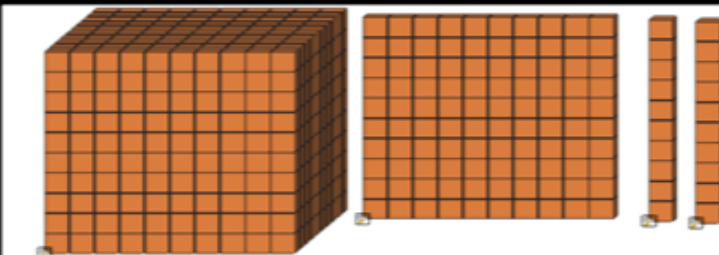

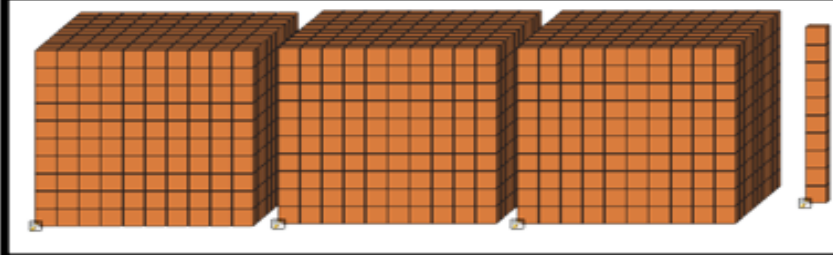


Lesson 4 Place Value

Name _____



Darken in the correct answer for each problem.
Scan the QR Code to check your answers

 <ul style="list-style-type: none"><input type="radio"/> 200<input type="radio"/> 120<input type="radio"/> 220	 <ul style="list-style-type: none"><input type="radio"/> 420<input type="radio"/> 402<input type="radio"/> 412	1
 <ul style="list-style-type: none"><input type="radio"/> 600<input type="radio"/> 610<input type="radio"/> 611	 <ul style="list-style-type: none"><input type="radio"/> 400<input type="radio"/> 440<input type="radio"/> 404	
 <ul style="list-style-type: none"><input type="radio"/> 1,120<input type="radio"/> 1,102<input type="radio"/> 1,125		3
 <ul style="list-style-type: none"><input type="radio"/> 2,034<input type="radio"/> 2,304<input type="radio"/> 2,340		4
 <ul style="list-style-type: none"><input type="radio"/> 3,103<input type="radio"/> 3,013<input type="radio"/> 3,130		5