

Lesson 5 Place Value 100 (Hundreds)

Name _____



Write the numbers in spaces provided.
The video will provide you with the answers at the end.

1 hundred = 10 tens = 100 ones

Write how many hundreds, tens, and ones



_____ hundreds _____ tens _____ ones

A




_____ hundreds _____ tens _____ ones

B



_____ hundreds _____ tens _____ ones

C



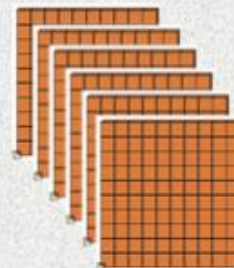
_____ hundreds _____ tens _____ ones

D




_____ hundreds _____ tens _____ ones

E



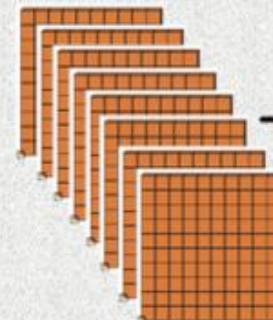
_____ hundreds _____ tens _____ ones

F



_____ hundreds _____ tens _____ ones

G



_____ hundreds _____ tens _____ ones

H