














































Lesson 2 Counting by TENS

Name _____



Write the amount below each dime and place the total amount in the space provided.

Scan the QR Code to check your answers

1)	 +  +  +  +  =	Total
	_____¢ _____¢ _____¢ _____¢ _____¢	_____
2)	 +  +  +  +  +  =	Total
	_____¢ _____¢ _____¢ _____¢ _____¢ _____¢	_____
3)	 +  +  +  +  +  +  +  =	Total
	_____¢ _____¢ _____¢ _____¢ _____¢ _____¢ _____¢ _____¢	_____
4)	 +  +  +  +  +  +  =	Total
	_____¢ _____¢ _____¢ _____¢ _____¢ _____¢ _____¢	_____
5)	 +  +  +  +  =	Total
	_____¢ _____¢ _____¢ _____¢ _____¢	_____
6)	 +  +  +  +  +  +  +  +  =	Total
	_____¢ _____¢ _____¢ _____¢ _____¢ _____¢ _____¢ _____¢ _____¢	_____
7)	 +  +  +  +  =	Total
	_____¢ _____¢ _____¢ _____¢ _____¢	_____