











Directions: In the space provided place the value of each object. You may click on the video to provide you with the answers




A

| | | | |
|---|---|---|---|
|  |  |  | 4 |
|  |  |  | 7 |
|  |  |  | 5 |
| 7 | 6 | 3 | |

| | |
|---|-------|
|  | _____ |
|  | _____ |
|  | _____ |




B

| | | | |
|--|--|--|---|
|  |  |  | 7 |
|  |  |  | 3 |
|  |  |  | 8 |
| 7 | 6 | 5 | |










| | |
|---|-------|
|  | _____ |
|  | _____ |
|  | _____ |




C

| | | | |
|---|---|---|----|
|  |  |  | 11 |
|  |  |  | 7 |
|  |  |  | 10 |
| 9 | 9 | 10 | |

| | |
|---|-------|
|  | _____ |
|  | _____ |
|  | _____ |

D

| | | | |
|---|---|---|----|
|  |  |  | 12 |
|  |  |  | 13 |
|  |  |  | 10 |
| 13 | 9 | 13 | |

| | |
|---|-------|
|  | _____ |
|  | _____ |
|  | _____ |