










LESSON 5 PICTURE MATH NAME \_\_\_\_\_






Directions: In the space provided place the value of each object. You may click on the video to provide you with the answers










Working area




**A**

			50
			70
			60
60	40	80	










	_____
	_____
	_____




**B**

			100
			115
			100
95	120	100	










	_____
	_____
	_____




**C**

			41
			43
			45
47	49	33	

	_____
	_____
	_____

**D**

			51
			69
			51
60	78	33	

	_____
	_____
	_____