



NAME _____ Math Picture Puzzle B

MATH PICTURE PUZZLES Directions: determine the answer for each picture puzzle place in the space provided.

A

1.)  +  = 13



2.)  +  = 20



3.)  +  = _____

Write your answers on your sheet

B



1.)  +  = 16

2.)  +  = 12

3.)  +  = _____

Write your answers on your

C

1.)  +  = 19

2.)  +  = 15

3.)  +  = _____

Write your answers on your sheet

D

1.)  +  = 14

2.)  +  = 12

3.)  +  = _____

Write your answers on your