

NAME _____ Math Picture Puzzle C

MATH PICTURE PUZZLES Directions: determine the answer for each picture puzzle place in the space provided.

A




1.)  +  = 14



2.)  +  = 8




3.)  +  = _____

Write your answers on your sheet

B

1.)  +  +  = 15

2.)  +  = 10

3.)   +  = _____

Write your answers on your sheet

C




1.)  +  = 12





2.)  +  = 10

3.)   +   = _____

Write your answers on your

D

1.)  +   = 7

2.)  +    = 8

3.)  +   = _____

Write your answers on your