







NAME \_\_\_\_\_ Lesson F




**MATH PICTURE PUZZLES** Directions: determine the answer for each picture puzzle place in the space provided. You must look carefully at each picture to determine the correct answer!




**A**

*Bert And Ernie*

 +  +  = 6




 +  +  = 5




 +  +  = 4




 +  +  = \_\_\_\_\_





**B**

*The Bears*

 +  +  = 6




 +  +  = 5




 +  +  = 4




 +  +  +  = \_\_\_\_\_




**C**

*The Clowns*

 +  +  = 12




 +  +  = 8




 +  +  = 6




 +  +  = \_\_\_\_\_




**D**

*Disney*

 +  +  = 15

 +  +  = 6

 +  +  = 12

 +  +  = \_\_\_\_\_