











**PRACTICE TEST A ADDITION**

NAME \_\_\_\_\_

Place your answer by darkling in the correct circle for each problem.

<p>A. <math>\begin{array}{r} 6 \\ +2 \\ \hline \end{array}</math></p>  <p><input type="radio"/> 8 <input type="radio"/> 12 <input type="radio"/> 14</p>	<p>F. <math>\begin{array}{r} 3 \\ +3 \\ \hline \end{array}</math></p>  <p><input type="radio"/> 8 <input type="radio"/> 7 <input type="radio"/> 6</p>
<p>B. <math>\begin{array}{r} 3 \\ +2 \\ \hline \end{array}</math></p>  <p><input type="radio"/> 8 <input type="radio"/> 5 <input type="radio"/> 4</p>	<p>G. <math>\begin{array}{r} 5 \\ +5 \\ \hline \end{array}</math></p>  <p><input type="radio"/> 9 <input type="radio"/> 10 <input type="radio"/> 8</p>
<p>C. <math>\begin{array}{r} 5 \\ +1 \\ \hline \end{array}</math></p>  <p><input type="radio"/> 8 <input type="radio"/> 7 <input type="radio"/> 6</p>	<p>H. <math>\begin{array}{r} 7 \\ +1 \\ \hline \end{array}</math></p>  <p><input type="radio"/> 6 <input type="radio"/> 7 <input type="radio"/> 8</p>
<p>D. <math>\begin{array}{r} 6 \\ +4 \\ \hline \end{array}</math></p>  <p><input type="radio"/> 7 <input type="radio"/> 6 <input type="radio"/> 10</p>	<p>I. <math>\begin{array}{r} 5 \\ +3 \\ \hline \end{array}</math></p>  <p><input type="radio"/> 8 <input type="radio"/> 7 <input type="radio"/> 5</p>
<p>E. <math>\begin{array}{r} 4 \\ +3 \\ \hline \end{array}</math></p>  <p><input type="radio"/> 7 <input type="radio"/> 4 <input type="radio"/> 3</p>	<p>J. <math>\begin{array}{r} 8 \\ +1 \\ \hline \end{array}</math></p>  <p><input type="radio"/> 10 <input type="radio"/> 9 <input type="radio"/> 5</p>