











PRACTICE TEST B ADDITION

NAME _____

Place your answer by darkling in the correct circle for each problem.

<p>A. $\begin{array}{r} 2 \\ +2 \\ \hline \end{array}$</p>  <p><input type="radio"/> 3 <input type="radio"/> 2 <input type="radio"/> 4</p>	<p>F. $\begin{array}{r} 5 \\ +3 \\ \hline \end{array}$</p>  <p><input type="radio"/> 8 <input type="radio"/> 3 <input type="radio"/> 5</p>
<p>B. $\begin{array}{r} 3 \\ +1 \\ \hline \end{array}$</p>  <p><input type="radio"/> 4 <input type="radio"/> 1 <input type="radio"/> 3</p>	<p>G. $\begin{array}{r} 7 \\ +2 \\ \hline \end{array}$</p>  <p><input type="radio"/> 9 <input type="radio"/> 7 <input type="radio"/> 2</p>
<p>C. $\begin{array}{r} 4 \\ +2 \\ \hline \end{array}$</p>  <p><input type="radio"/> 2 <input type="radio"/> 4 <input type="radio"/> 6</p>	<p>H. $\begin{array}{r} 7 \\ +3 \\ \hline \end{array}$</p>  <p><input type="radio"/> 10 <input type="radio"/> 7 <input type="radio"/> 3</p>
<p>D. $\begin{array}{r} 4 \\ +3 \\ \hline \end{array}$</p>  <p><input type="radio"/> 7 <input type="radio"/> 4 <input type="radio"/> 3</p>	<p>I. $\begin{array}{r} 6 \\ +4 \\ \hline \end{array}$</p>  <p><input type="radio"/> 4 <input type="radio"/> 7 <input type="radio"/> 10</p>
<p>E. $\begin{array}{r} 5 \\ +1 \\ \hline \end{array}$</p>  <p><input type="radio"/> 5 <input type="radio"/> 6 <input type="radio"/> 1</p>	<p>J. $\begin{array}{r} 5 \\ +2 \\ \hline \end{array}$</p>  <p><input type="radio"/> 7 <input type="radio"/> 2 <input type="radio"/> 5</p>