

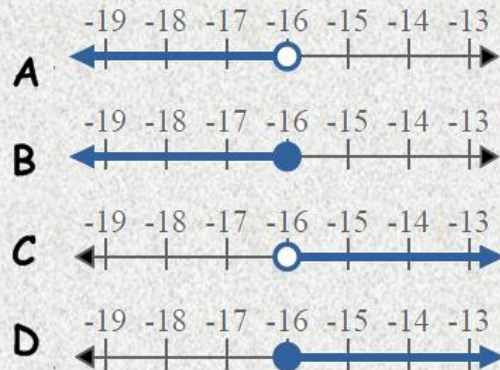
Lesson 7 Writing Inequalities

Name _____

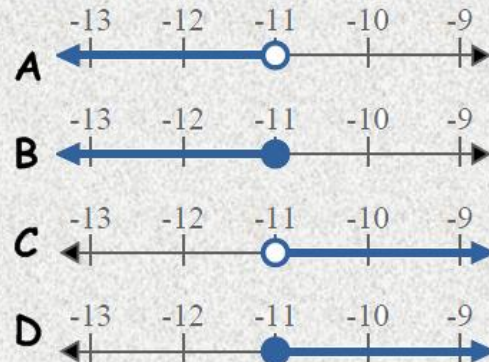
Directions: Use the number line to express the inequality.
Scan the QR Code to check your answers.



1) Which option best shows $X > -16$



2) Which option best shows $X \geq -11$



1. _____

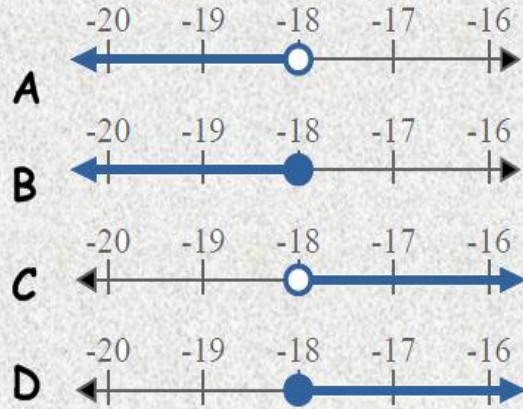
2. _____

3. _____

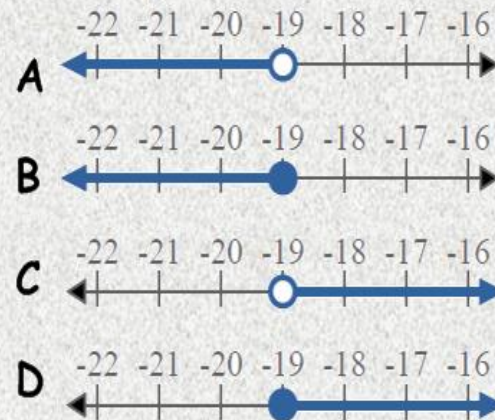
4. _____

5. _____

3) Which option best shows $X \leq -18$



4) Which option best shows $X > -19$



5) Which option best shows $X < -15$

