

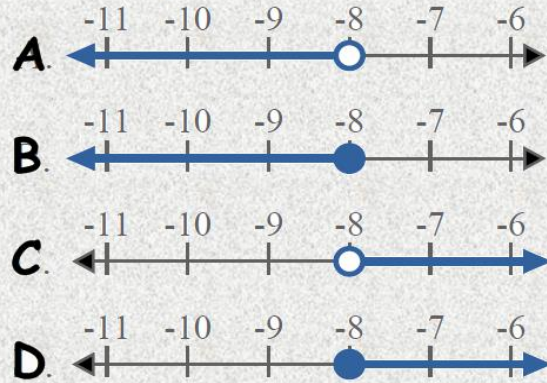
Lesson 8 Writing Inequalities

Name _____

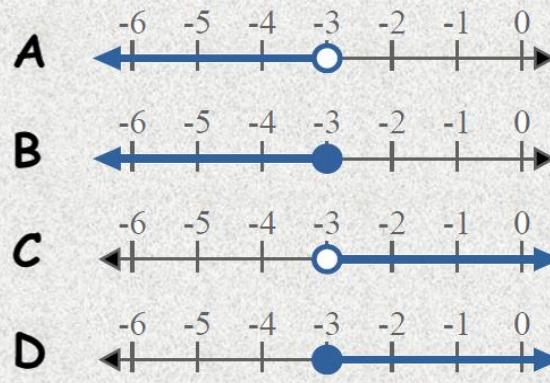
Directions: Use the number line to express the inequality.
Scan the QR Code to check your answers.



1) Which option best shows $X > -8$



2) Which option best shows $X \leq -3$



1. _____

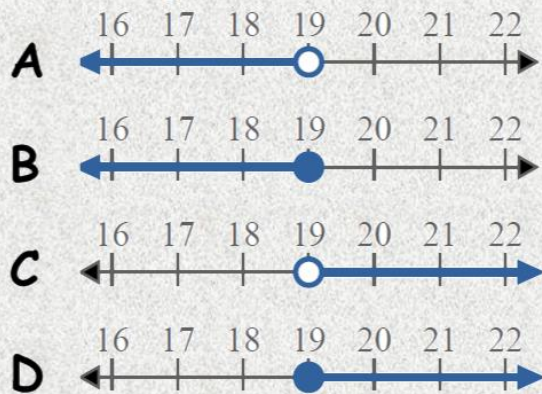
2. _____

3. _____

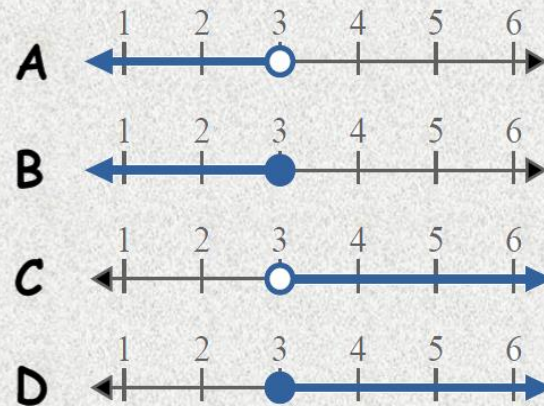
4. _____

5. _____

3) Which option best shows $X \leq 19$



4) Which option best shows $X < 3$



5) Which option best shows $X \leq 2$

