



# Lesson A Super Algebra Logic design for Students


Name \_\_\_\_\_

Directions: Create your logic and values for each symbol problem listed below.


1



 \_\_\_\_\_


 \_\_\_\_\_

 \_\_\_\_\_


2



 \_\_\_\_\_


 \_\_\_\_\_

 \_\_\_\_\_


3



 \_\_\_\_\_


 \_\_\_\_\_

 \_\_\_\_\_

4


 \_\_\_\_\_

 \_\_\_\_\_

 \_\_\_\_\_