

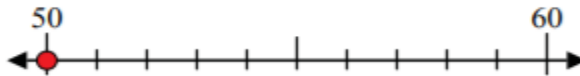
LESSON 1 ROUNDING NUMBERS



NAME _____


Directions: Click on the button for video and answers to this lesson. Use the number lines to round each number to the nearest 10.

1) 50



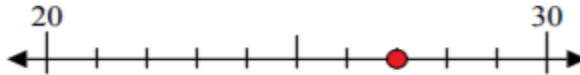
1. _____

2) 51



2. _____

3) 27



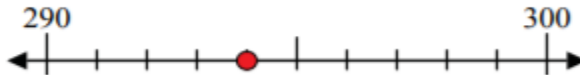
3. _____

4) 79




4. _____

5) 294



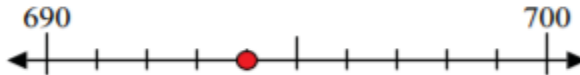
5. _____

6) 746



6. _____

7) 694



7. _____

8) 685



8. _____

9) 3,343



9. _____

10) 8,056



10. _____