





Lesson 1 Logic Problem Name _____

Directions:

Follow the logic problem clues and place the name of each person below and the correct name of the shape. The clues will help. Follow the coded letters below.

- 1) *Danny's shape had sides that were not all the same size*
- 2) *Carol's chose a curved shape.*
- 3) *Penny's shape was not a square*
- 4) *Sandy's shape had 4 sides.*

			
1.	2.	3.	4.

CODED ANSWERS:

A	B	C	D	E	F	G	H	I	J	K	L	M
1	2	3	4	5	6	7	8	9	10	11	12	13
N	O	P	Q	R	S	T	U	V	W	X	Y	Z
14	15	16	17	18	19	20	21	22	23	24	25	26

CODE	PERSONS NAME	CODE	NAME OF SHAPE
1. 16-5-14-14-25		20-18-9-1-14-7-12-5	
2. 4-1-14-14-25		18-5-3-20-1-14-7-12-5	
3. 19-1-14-4-25		19-17-21-1-18-5	
4. 3-1-18-15-12		3-9-18-3-12-5	