

Lesson 1 Symmetry

Name _____



Directions:

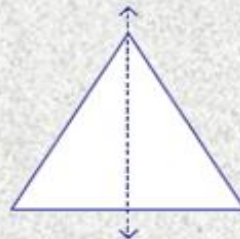
Is the dotted line on each shape a line of symmetry?

Write yes or no.

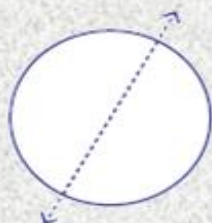
1)



2)



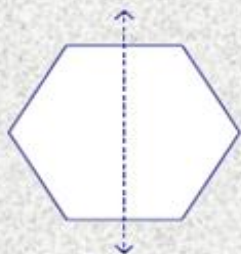
3)



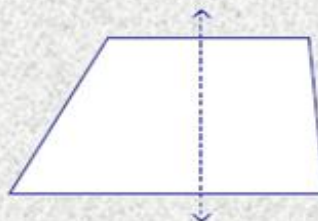
4)



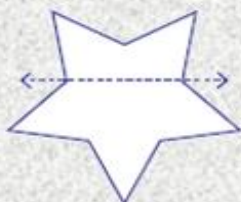
5)



6)



7)



8)

