


Lesson 8 Time Elapsed Time




Name _____

Directions: Click on the video button above or scan the QR Code to bring the instructional video up. Pause the video after directions then fill in the times specified for each problem. Play the video and it will provide you with the answers.

1




START TIME
3:00




END TIME
4:00

ELAPSED TIME
HOURS MIN
1 00

3




START TIME
9:00




END TIME
10:30

ELAPSED TIME
HOURS MIN
1 30

2




START TIME
1:00




END TIME
2:30

ELAPSED TIME
HOURS MIN
1 30

4




START TIME
12:00




END TIME
1:30

ELAPSED TIME
HOURS MIN
1 30

5




START TIME
8:00




END TIME
9:25

ELAPSED TIME
HOURS MIN
1 25

7




START TIME
9:00




END TIME
10:00

ELAPSED TIME
HOURS MIN
1 00

6




START TIME
10:30




END TIME
11:35

ELAPSED TIME
HOURS MIN
1 05

8



START TIME
11:30



END TIME
12:40

ELAPSED TIME
HOURS MIN
1 10