

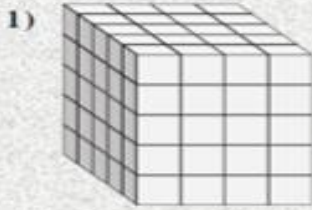
# LESSON 1 VOLUME

NAME \_\_\_\_\_

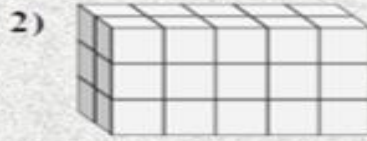


*Directions: Find the length, width and height of the rectangular prism. Then calculate the VOLUME. Place all calculations in the spaces provided.*

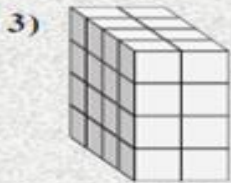
*Scan the QR Code to check your answers.*



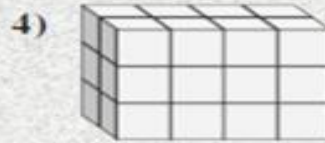
L    W    H    V  
5 4    5    100



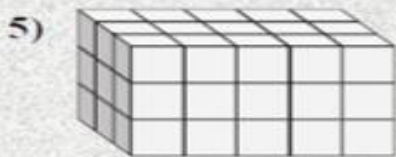
L    W    H    V  
— — — —



L    W    H    V  
— — — —



L    W    H    V  
— — — —



L    W    H    V  
— — — —



L    W    H    V  
— — — —