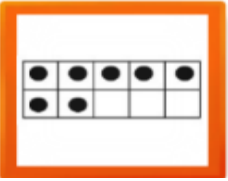

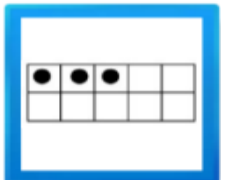

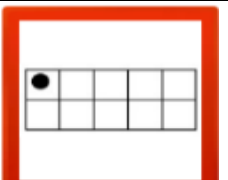


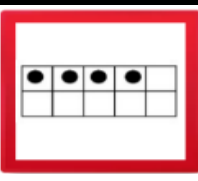
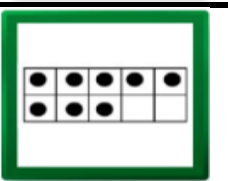
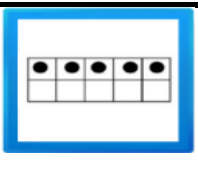


**MATH LESSON LESSION 5 NAME** \_\_\_\_\_

*Place a Circle around the number showing the correct number of DOTS in each square.*

1		<table border="1"> <tr><td>1</td><td>2</td><td>3</td><td>4</td><td>5</td><td>0</td></tr> <tr><td>6</td><td>7</td><td>8</td><td>9</td><td>10</td><td>11</td></tr> </table>	1	2	3	4	5	0	6	7	8	9	10	11	6		
1	2	3	4	5	0												
6	7	8	9	10	11												
2		<table border="1"> <tr><td>1</td><td>2</td><td>3</td><td>4</td><td>5</td><td>0</td></tr> <tr><td>6</td><td>7</td><td>8</td><td>9</td><td>10</td><td>11</td></tr> </table>	1	2	3	4	5	0	6	7	8	9	10	11	7		
1	2	3	4	5	0												
6	7	8	9	10	11												
3		<table border="1"> <tr><td>1</td><td>2</td><td>3</td><td>4</td><td>5</td><td>0</td></tr> <tr><td>6</td><td>7</td><td>8</td><td>9</td><td>10</td><td>11</td></tr> </table>	1	2	3	4	5	0	6	7	8	9	10	11	8		
1	2	3	4	5	0												
6	7	8	9	10	11												
4		<table border="1"> <tr><td>1</td><td>2</td><td>3</td><td>4</td><td>5</td><td>0</td></tr> <tr><td>6</td><td>7</td><td>8</td><td>9</td><td>10</td><td>11</td></tr> </table>	1	2	3	4	5	0	6	7	8	9	10	11	9		
1	2	3	4	5	0												
6	7	8	9	10	11												
5		<table border="1"> <tr><td>1</td><td>2</td><td>3</td><td>4</td><td>5</td><td>0</td></tr> <tr><td>6</td><td>7</td><td>8</td><td>9</td><td>10</td><td>11</td></tr> </table>	1	2	3	4	5	0	6	7	8	9	10	11	10		
1	2	3	4	5	0												
6	7	8	9	10	11												