






**PRE-SCHOOL MATH LESSON LESSION 2**

NAME \_\_\_\_\_

*Place a Circle around the number showing the correct number of balloons on the left.*

|   |   |  |
|---|---|--|
| 1 |    | <input type="checkbox"/> 1 <input type="checkbox"/> 4 <input type="checkbox"/> 3 <input type="checkbox"/> 2 <input type="checkbox"/> 5 |
| 2 |   | <input type="checkbox"/> 1 <input type="checkbox"/> 4 <input type="checkbox"/> 3 <input type="checkbox"/> 2 <input type="checkbox"/> 5 |
| 3 |  | <input type="checkbox"/> 1 <input type="checkbox"/> 4 <input type="checkbox"/> 3 <input type="checkbox"/> 2 <input type="checkbox"/> 5 |
| 4 |  | <input type="checkbox"/> 1 <input type="checkbox"/> 4 <input type="checkbox"/> 3 <input type="checkbox"/> 2 <input type="checkbox"/> 5 |
| 5 |  | <input type="checkbox"/> 1 <input type="checkbox"/> 4 <input type="checkbox"/> 3 <input type="checkbox"/> 2 <input type="checkbox"/> 5 |