











PRE-SCHOOL MATH LESSON LESSION 8 NAME _____

Place a Circle around the number of dots showing for each group.

1		<table border="1"> <tr> <td>1</td> <td>2</td> <td>3</td> <td>4</td> <td>5</td> </tr> <tr> <td>6</td> <td>7</td> <td>8</td> <td>9</td> <td>10</td> </tr> </table>	1	2	3	4	5	6	7	8	9	10	6		<table border="1"> <tr> <td>1</td> <td>2</td> <td>3</td> <td>4</td> <td>5</td> </tr> <tr> <td>6</td> <td>7</td> <td>8</td> <td>9</td> <td>10</td> </tr> </table>	1	2	3	4	5	6	7	8	9	10
1	2	3	4	5																					
6	7	8	9	10																					
1	2	3	4	5																					
6	7	8	9	10																					
2		<table border="1"> <tr> <td>1</td> <td>2</td> <td>3</td> <td>4</td> <td>5</td> </tr> <tr> <td>6</td> <td>7</td> <td>8</td> <td>9</td> <td>10</td> </tr> </table>	1	2	3	4	5	6	7	8	9	10	7		<table border="1"> <tr> <td>1</td> <td>2</td> <td>3</td> <td>4</td> <td>5</td> </tr> <tr> <td>6</td> <td>7</td> <td>8</td> <td>9</td> <td>10</td> </tr> </table>	1	2	3	4	5	6	7	8	9	10
1	2	3	4	5																					
6	7	8	9	10																					
1	2	3	4	5																					
6	7	8	9	10																					
3		<table border="1"> <tr> <td>1</td> <td>2</td> <td>3</td> <td>4</td> <td>5</td> </tr> <tr> <td>6</td> <td>7</td> <td>8</td> <td>9</td> <td>10</td> </tr> </table>	1	2	3	4	5	6	7	8	9	10	8		<table border="1"> <tr> <td>1</td> <td>2</td> <td>3</td> <td>4</td> <td>5</td> </tr> <tr> <td>6</td> <td>7</td> <td>8</td> <td>9</td> <td>10</td> </tr> </table>	1	2	3	4	5	6	7	8	9	10
1	2	3	4	5																					
6	7	8	9	10																					
1	2	3	4	5																					
6	7	8	9	10																					
4		<table border="1"> <tr> <td>1</td> <td>2</td> <td>3</td> <td>4</td> <td>5</td> </tr> <tr> <td>6</td> <td>7</td> <td>8</td> <td>9</td> <td>10</td> </tr> </table>	1	2	3	4	5	6	7	8	9	10	9		<table border="1"> <tr> <td>1</td> <td>2</td> <td>3</td> <td>4</td> <td>5</td> </tr> <tr> <td>6</td> <td>7</td> <td>8</td> <td>9</td> <td>10</td> </tr> </table>	1	2	3	4	5	6	7	8	9	10
1	2	3	4	5																					
6	7	8	9	10																					
1	2	3	4	5																					
6	7	8	9	10																					
5		<table border="1"> <tr> <td>1</td> <td>2</td> <td>3</td> <td>4</td> <td>5</td> </tr> <tr> <td>6</td> <td>7</td> <td>8</td> <td>9</td> <td>10</td> </tr> </table>	1	2	3	4	5	6	7	8	9	10	10		<table border="1"> <tr> <td>1</td> <td>2</td> <td>3</td> <td>4</td> <td>5</td> </tr> <tr> <td>6</td> <td>7</td> <td>8</td> <td>9</td> <td>10</td> </tr> </table>	1	2	3	4	5	6	7	8	9	10
1	2	3	4	5																					
6	7	8	9	10																					
1	2	3	4	5																					
6	7	8	9	10																					