






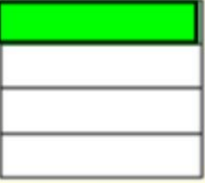



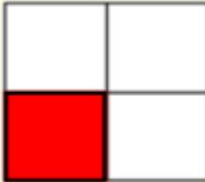


Naming Fractions - 1

Naming Fractions Lesson 1 Name _____

1. Click on video button below for directions & answers
2. Write the letter that describes the shaded portion.
3. When you're done scan in the QR code at the bottom.



<p>1) </p> <p>A Three Quarters B One-Third C One Quarter</p>	<p>2) </p> <p>A Three Quarters B Two Quarters C One-Forth</p>	<p>3) </p> <p>A Two-Fourths B One Quarter C Three Quarters</p>
<p>4) </p> <p>A Three Quarters B One-Quarter C One Half</p>	<p>5) </p> <p>A Three Quarters B Two Quarters C One-Quarter</p>	<p>6) </p> <p>A Two Quarters B Four-Fourths C One Quarter</p>
<p>7) </p> <p>A Two Quarters B One Quarter C Two Halves</p>	<p>8) </p> <p>A Two Quarters B One Quarters C Two Quarters</p>	<p>9) </p> <p>A Two Quarters B Three Quarters C One Quarter</p>
<p>10) </p> <p>A Three Fourths B One Quarter C Two Fourths</p>	<p>11) </p> <p>A Two Quarters B Three Quarters C One-Quarter</p>	<p>12) </p> <p>A Two Quarters B One Fourth C Three Quarters</p>

1. _____
2. _____
3. _____
4. _____
5. _____
6. _____
7. _____
8. _____
9. _____
10. _____
11. _____
12. _____