




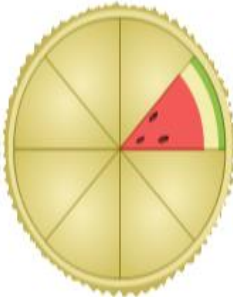
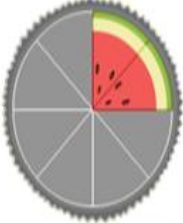

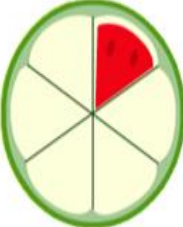

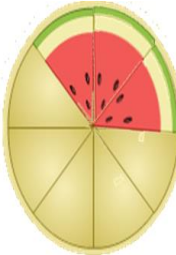
Naming Fractions – 10



Name _____

1. Click video button for directions and answers.
2. Place the letter of the fraction that complements the shapes
3. When you're done scan in the QR code at the bottom to check your answers.



	1) _____		6) _____	A	$\frac{3}{8}$
	2) _____		7) _____	B	$\frac{1}{6}$
	3) _____		8) _____	C	$\frac{2}{8}$
	4) _____		9) _____	D	$\frac{4}{8}$
	5) _____			E	$\frac{4}{5}$
				F	$\frac{2}{5}$
				G	$\frac{1}{5}$
				H	$\frac{3}{5}$
				I	$\frac{1}{8}$