

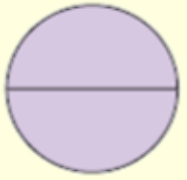

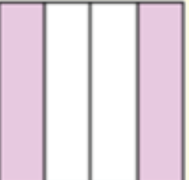






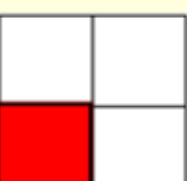


Naming Fractions

Naming Fractions Lesson 2 Name _____

1. Click on the video button for directions & answers
2. Which letter that best describes the shaded portion.
3. When you're done scan in the QR code at the bottom.



<p>1) </p> <p>A One Quarter B Three Quarters C One Third</p>	<p>2) </p> <p>A One Quarter B Two Quarters C Two Thirds</p>	<p>3) </p> <p>A Three Quarters B One Quarter C Two Halfs</p>
<p>4) </p> <p>A Three Quarters B One-Third C Two Fourths</p>	<p>5) </p> <p>A Three Quarters B One-Forth C Two Quarters</p>	<p>6) </p> <p>A Three Quarters B One Quarter C Two-Fourths</p>
<p>7) </p> <p>A Three Quarters B One-Third C Three Thirds</p>	<p>8) </p> <p>A Three Quarters B One Forth C Two Quarters</p>	<p>9) </p> <p>A Three Quarters B One Quarter C Four-Fourths</p>
<p>10) </p> <p>A Three Quarters B Two Quarters C One Quarter</p>	<p>11) </p> <p>A Three Thirds B Two Quarters C Three-Forths</p>	<p>12) </p> <p>A Two Quarters B Three Quarters C One Quarter</p>

1.	_____
2.	_____
3.	_____
4.	_____
5.	_____
6.	_____
7.	_____
8.	_____
9.	_____
10.	_____
11.	_____
12.	_____