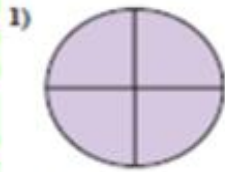


Naming Fractions

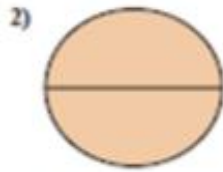


Naming Fractions Lesson 3 Name _____

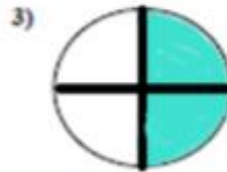
1. Which letter that best describes the shaded portion.
2. When you're done scan in the QR code at the bottom.



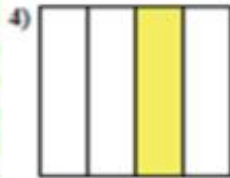
- A. Two Quarters
B. Four-Fourths
C. One Quarter




- A. Two Quarters
B. One Quarter
C. Two Halves



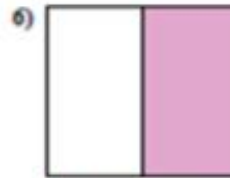
- A. Two Quarters
B. One Quarter
C. Three Quarters




- A. Three Quarters
B. Two Quarters
C. One-Fourth



- A. Two Quarters
B. One Quarter
C. Four Quarters



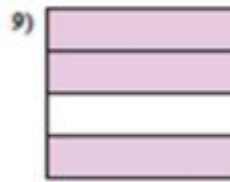
- A. Three Quarters
B. One Quarter
C. One Half



- A. Three Quarters
B. Two Quarters
C. One Quarter



- A. One Quarter
B. Three Quarters
C. Two-Fourths



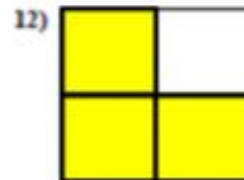
- A. Two Quarters
B. Three Quarters
C. One Quarter



- A. Three Quarters
B. One Quarter
C. Two Quarters



- A. Two-Fourths
B. One Quarter
C. Three Quarters



- A. Two Quarters
B. Three-Fourths
C. One Quarter

1. _____

2. _____

3. _____

4. _____

5. _____

6. _____

7. _____

8. _____

9. _____

10. _____

11. _____

12. _____