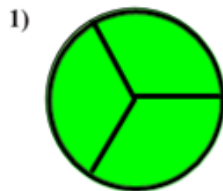


Naming Fractions

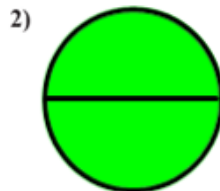


Naming Fractions Lesson 4 Name _____

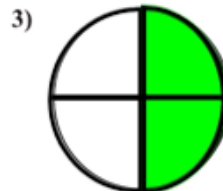
1. Click on Video button for Directions & Answers
2. Which letter that best describes the shaded portion.
3. When you're done scan in the QR code at the bottom.



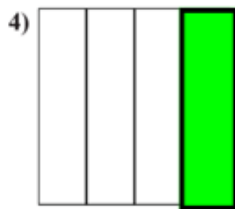
- A. One Quarter
B. Three-Thirds
C. Two Quarters



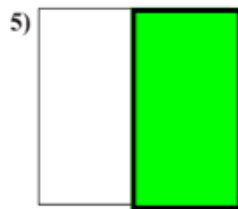
- A. One Quarter
B. Two Quarters
C. Two Halves



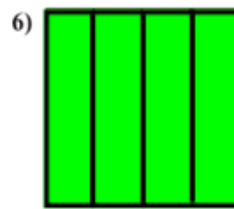
- A. Two Quarters
B. Three Quarters
C. One Quarter



- A. Three Quarters
B. One-Fourth
C. Two Quarters



- A. Three Quarters
B. One Half
C. One Quarter



- A. One Quarter
B. Four-Fourths
C. Two Quarters



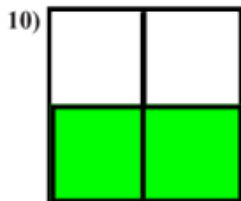
- A. Three Quarters
B. One Quarter
C. Two-Fourths



- A. Three Quarters
B. One Quarter
C. Two Quarters



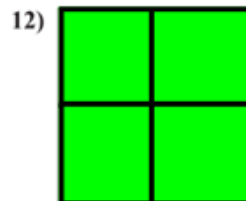
- A. One Quarter
B. Four Quarters
C. Two Quarters



- A. Three Quarters
B. One Quarter
C. Two Quarters



- A. One-Fourth
B. Two Quarters
C. Three Quarters



- A. One Quarter
B. Four Quarters
C. Two Quarters

1. _____
2. _____
3. _____
4. _____
5. _____
6. _____
7. _____
8. _____
9. _____
10. _____
11. _____
12. _____