
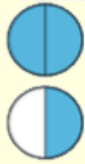
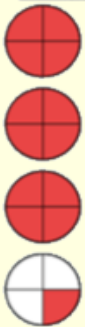
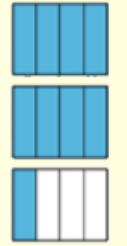

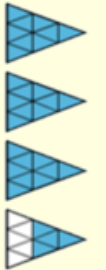


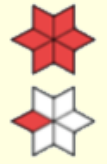





Naming Fractions – 6 Mixed Numbers

Name _____

1. Write the letter (A-L) that describes the 12 fractions listed. Place the letter above the fraction.

2. When you're done scan in the QR code at the bottom to check your answers.

1) _____ 	2) _____ 	3) _____ 	4) _____ 
5) _____ 	6) _____ 	7) _____ 	8) _____ 
9) _____ 	10) _____ 	11) _____ 	12) _____ 

Answers

- A) $2 \frac{1}{2}$
- B) $2 \frac{4}{9}$
- C) $1 \frac{2}{3}$
- D) $1 \frac{6}{9}$
- E) $2 \frac{1}{4}$
- F) $1 \frac{3}{6}$
- G) $1 \frac{1}{2}$
- H) $3 \frac{4}{9}$
- I) $3 \frac{1}{4}$
- J) $3 \frac{1}{6}$
- K) $1 \frac{1}{6}$
- L) $1 \frac{2}{9}$

