

# 3D SHAPES - 3

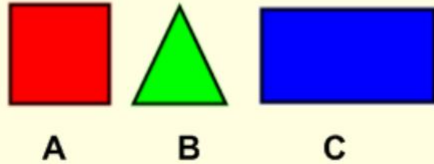


Lesson 3 Name \_\_\_\_\_

1. Place a circle around the correct letter.
2. Scan in the QR Code to check your answers

1) Which shape am I?

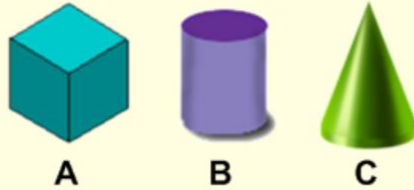
I have more than 3 sides  
I am not a square



A B C

2) Which shape am I?

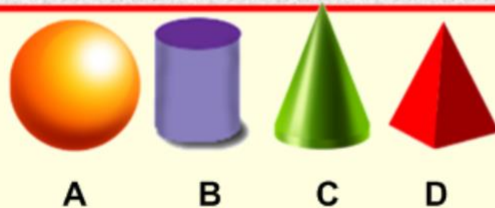
I have 2 flat surfaces.  
If you trace one surface,  
You will make a circle.



A B C

3) Which shape am I?

I have 0 edges.  
I do not have any  
flat surfaces.

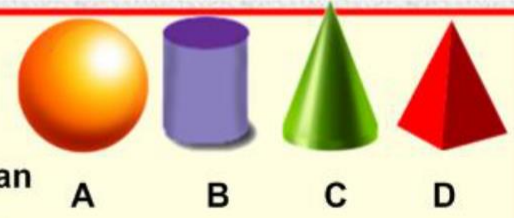


A B C D

4) Which shape am I?

I have 1 flat surface.

I have 1 vertex. You can  
trace my flat surface to  
make a circle.



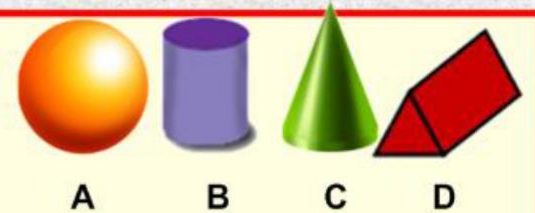
A B C D

5) Which shape am I?

I have 9 edges.

I have a 6 vertex

I have 5 faces



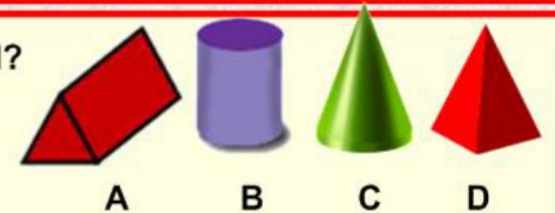
A B C D

6) Which shape am I?

I have 8 edges.

I have a 5 vertex

I have 5 faces



A B C D