


Function Machines

Add & Subtract




Lesson 1 Name _____

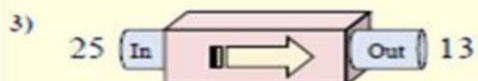
1. Please place the correct answer in the space we have provided
2. When done scan the QR code to see if your answers are correct.
3. Determine which rule the function machine is using circle the correct answer.



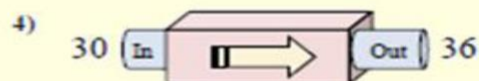
- A. Add 17
- B. Add 16
- C. Add 19
- D. Subtract 16




- A. Subtract 11
- B. Add 3
- C. Subtract 8
- D. Subtract 12




- A. Subtract 9
- B. Subtract 12
- C. Subtract 14
- D. Subtract 15




- A. Subtract 6
- B. Add 11
- C. Add 6
- D. Subtract 5




- A. Add 13
- B. Add 12
- C. Subtract 20
- D. Add 16



- A. Subtract 8
- B. Add 5
- C. Subtract 9
- D. Add 4



- A. Add 30
- B. Add 26
- C. Add 21
- D. Add 23



- A. Add 2
- B. Subtract 6
- C. Subtract 4
- D. Subtract 10