

Elapsed Time - 1



Lesson 1 Name _____


1. Figure out the time for each problem below
2. Scan in the QR Code to check your answers

1) Bill started Lunch Got back to class





How much time
has passed

2) Carol took dog walking Returned home



How much time
has passed

3) Pat went to bed Woke up at



How much time
has passed
