

Elapsed Time - 2

Lesson 2 Name _____

1. Figure out the time for each problem below
2. Scan in the QR Code to check your answers




1) Bill started work Got out of work





How much time
has passed

2) Carol started work Got out of work



How much time
has passed

3) Pat started work Got out of work



How much time
has passed
